

Year 4 Mathematics-Term 1 Week 5 Lesson 3

LO: To recall square numbers to 12 x 12 .

Square numbers from 1 to 10



Matching number.

2^2	64
8^2	16
6^2	25
5^2	100
7^2	4
4^2	36
10^2	49

TICK the square numbers.




1	49	4	17	36	89	144
75	101	81	123	46	9	
100	25	66	16	121	12	64

Write the number that is squared and the square number for each of these diagrams.



Number Squared: _____



Square Number: _____



Number Squared: _____

Square Number: _____

Write the number that is squared and the square number for each of these diagrams.



Number Squared: _____



Number Squared: _____

Square Number: _____

Square Number: _____


Number Squared: _____

Square Number: _____



Number Squared: _____

Square Number: _____



Number Squared: _____

Square Number: _____