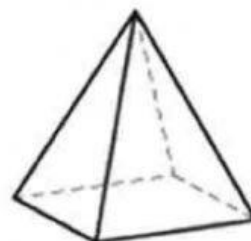

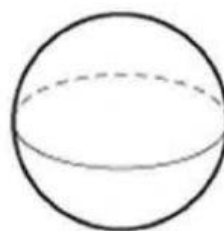
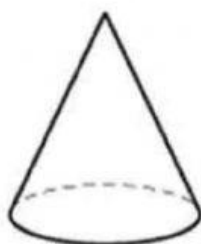
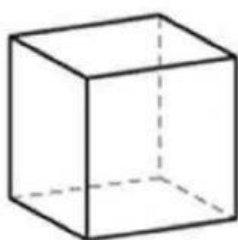


# SOLIDS AND 3D FIGURES

## Lesson Objectives:

To name common 3-dimensional solids:  
cube, cuboid, cylinder, cone and  
sphere.

1. Match the 3d solids with their names.



Cylinder

Sphere

Cuboid

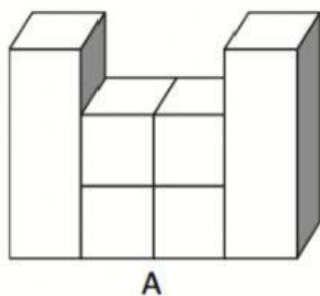
Cube

Pyramid

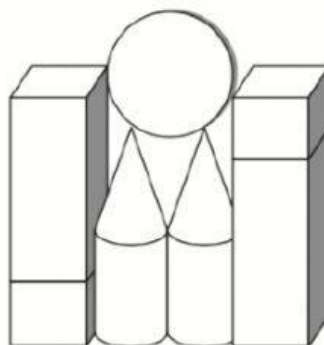
Cone

Hidayah 2021

2. Count and write the number of solids in each of the figures.



A






B

Solid	A	B
Cube		
Cuboid		
Cylinder		
Cone		
Sphere		

**HOW DO YOU FEEL ABOUT TODAY'S LESSON?**

Write your name in the box you have chosen.

 <p>I understand and I can do it on my own</p>	 <p>I do not really understand and I need more practice.</p>	 <p>I really need help</p>
---	---	---

*Hidayah/2021*