









COMPUTER STUDIES QUIZ FIRST QUIMESTER


Question 1: Order each Ross' movements to give a complete turn clockwise 

1	2	3	4	5	6	7
						
						


Question 2: Drag the cards for making pancakes into the correct order.

Step 1	Step 2	Step 3
Step 4	Step 5	Step 6


Spread pancake mix out




Let second side cook




Turn pancake over




Let first side cook



Take cooked pancake out



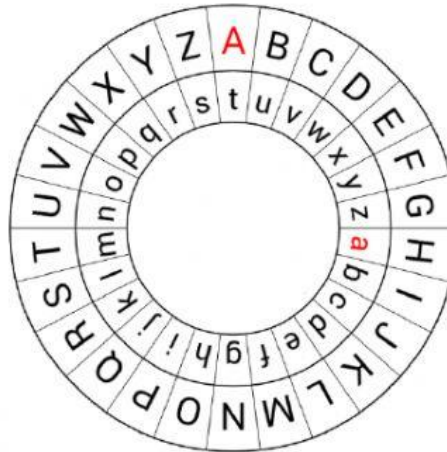
Pour pancake mix into pan



Question 3: Decipher the text using the wheel.

Example:

A = t



J	V	K	L	-	H	C	L	U	N	L	Y	Z
				-								

Question 4: Look at the balloons string. What is the repeating pattern?

