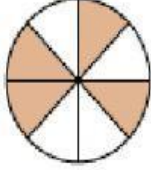
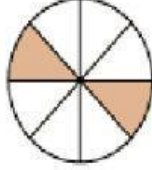
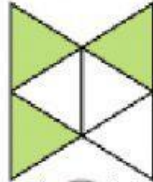

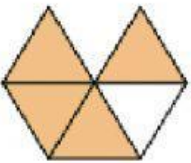
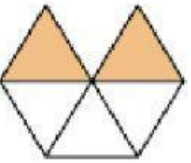


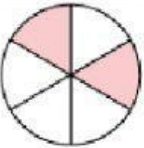


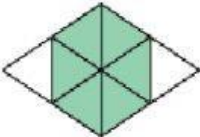
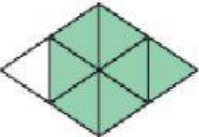
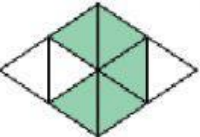


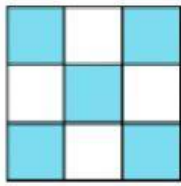

Look at the figures and CLICK at the fraction to choose the correct answer.

1) Which fraction is GREATER?



<p>a)</p> <div style="display: flex; justify-content: space-around; align-items: center;"> <div style="text-align: center;">  <div style="border: 1px solid black; padding: 5px; width: 40px; margin: 0 auto;"><math>\frac{4}{8}</math></div> </div> <div style="text-align: center;">  <div style="border: 1px solid black; padding: 5px; width: 40px; margin: 0 auto;"><math>\frac{2}{8}</math></div> </div> </div>	<p>b)</p> <div style="display: flex; justify-content: space-around; align-items: center;"> <div style="text-align: center;">  <div style="border: 1px solid black; padding: 5px; width: 40px; margin: 0 auto;"><math>\frac{3}{6}</math></div> </div> <div style="text-align: center;">  <div style="border: 1px solid black; padding: 5px; width: 40px; margin: 0 auto;"><math>\frac{5}{6}</math></div> </div> </div>
<p>c)</p> <div style="display: flex; justify-content: space-around; align-items: center;"> <div style="text-align: center;">  <div style="border: 1px solid black; padding: 5px; width: 40px; margin: 0 auto;"><math>\frac{4}{5}</math></div> </div> <div style="text-align: center;">  <div style="border: 1px solid black; padding: 5px; width: 40px; margin: 0 auto;"><math>\frac{2}{5}</math></div> </div> </div>	<p>d)</p> <div style="display: flex; justify-content: space-around; align-items: center;"> <div style="text-align: center;">  <div style="border: 1px solid black; padding: 5px; width: 40px; margin: 0 auto;"><math>\frac{4}{4}</math></div> </div> <div style="text-align: center;">  <div style="border: 1px solid black; padding: 5px; width: 40px; margin: 0 auto;"><math>\frac{1}{4}</math></div> </div> </div>
<p>e) Which fraction is the greatest?</p> <div style="display: flex; justify-content: space-around; align-items: center; margin-top: 10px;"> <div style="text-align: center;">  <div style="border: 1px solid black; padding: 5px; width: 40px; margin: 0 auto;"><math>\frac{2}{6}</math></div> </div> <div style="text-align: center;">  <div style="border: 1px solid black; padding: 5px; width: 40px; margin: 0 auto;"><math>\frac{1}{6}</math></div> </div> <div style="text-align: center;">  <div style="border: 1px solid black; padding: 5px; width: 40px; margin: 0 auto;"><math>\frac{4}{6}</math></div> </div> </div>	<p>f) Which fraction is the greatest?</p> <div style="display: flex; justify-content: space-around; align-items: center; margin-top: 10px;"> <div style="text-align: center;">  <div style="border: 1px solid black; padding: 5px; width: 40px; margin: 0 auto;"><math>\frac{6}{8}</math></div> </div> <div style="text-align: center;">  <div style="border: 1px solid black; padding: 5px; width: 40px; margin: 0 auto;"><math>\frac{7}{8}</math></div> </div> <div style="text-align: center;">  <div style="border: 1px solid black; padding: 5px; width: 40px; margin: 0 auto;"><math>\frac{5}{8}</math></div> </div> </div>

2) Which fraction is SMALLER?

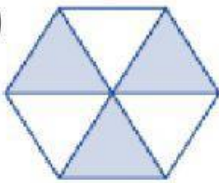
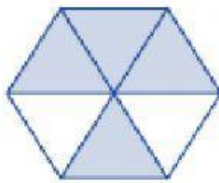
a)


$$\frac{5}{9}$$

$$\frac{3}{9}$$

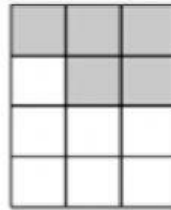

b)


$$\frac{5}{6}$$

$$\frac{4}{6}$$

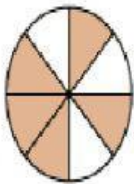
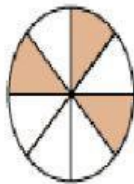
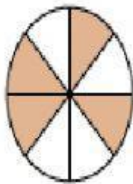
c)


$$\frac{3}{6}$$

$$\frac{5}{6}$$

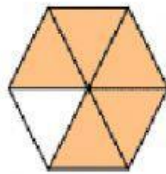
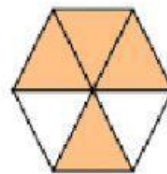
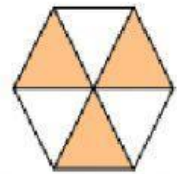
d)


$$\frac{5}{12}$$

$$\frac{6}{12}$$

e) Which fraction is the smallest?


$$\frac{5}{8}$$

$$\frac{3}{8}$$

$$\frac{4}{8}$$

f) Which fraction is the smallest?


$$\frac{5}{6}$$

$$\frac{4}{6}$$

$$\frac{3}{6}$$