


DIVIDING BY 10, 100


Video




① Divide.

(a) 

$$100 : 10 = \square$$

(b) 

$$920 : 10 = \square$$

(c) 

$$400 : 100 = \square$$

(d) 

$$900 : 100 = \square$$

② Dividing By 10, 100 With Word Problems

- (a) A tower guide shows 120 tourists around Singapore. The tourists are divided into groups of 10. How many groups of tourists are there?

_____ groups

- (b) Hassan Delivered 250 pizzas in 10 days.
He delivered the same number of pizzas each day.
How many pizzas did Hassan deliver each day?

_____ pizzas

- (c) Linda bought 700 pears.
She placed 100 pears in each carton.
How many cartons did Linda use?

_____ cartons

- (d) Benny had 600 balloons .
He packed 100 balloons in each bag.
How many bags did Benny use?

_____ bags



Elijah says that $900 : 100$ is the same as $90 : 10$.

Do you agree with him? Why do you say so?

How did you work out your answer