


## แบบฝึกหัด การคูณแบบเบี่ยงฐาน


1)  $782 \times 791$



ตอบ (   $\times$   ) +

= .....


2)  $97 \times 102$



ตอบ (   $\times$   ) +

= .....

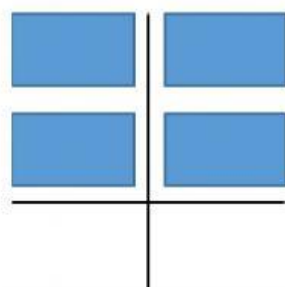
3)  $704 \times 689$



ตอบ (   $\times$   ) +

= .....

4)  $34 \times 32$



ตอบ (   $\times$   ) +

= .....