









# ÷ DIVISION ÷

1.) Make the divisions below and join the result with the answer.

$20 / 4$	$9$
$10 / 5$	$5$
$18 / 2$	$4$
$12 / 3$	$2$

A curved line connects the box containing  $20 / 4$  to the box containing  $5$ .

2.) Solve the next divisions and choose the correct answer.

	$30 / 10$	$12 / 6$	$8 / 4$	
	<input type="text" value="3"/>	<input type="text"/>	<input type="text"/>	
				
	$15 / 5$	$9 / 3$	$14 / 7$	
	<input type="text"/>	<input type="text"/>	<input type="text"/>	