


Recognize and identify the names and properties of common 2D shapes.

Square

Circle

Rectangle


Triangle



This 2D shape is a _____.

It has _____ corners.


It has _____ sides.



This 2D shape is a _____.

It has _____ corners.

It has _____ sides.



This 2D shape is a _____.

It has _____ corners.

It has _____ sides.



This 2D shape is a _____.

It has _____ corners.

It has _____ sides.

