

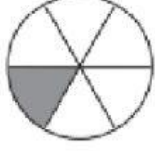
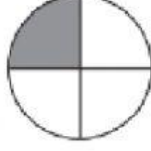


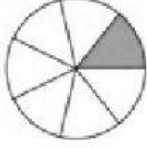
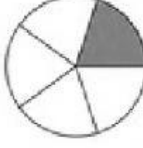


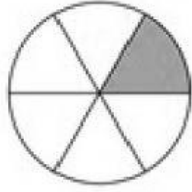






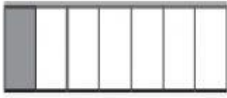

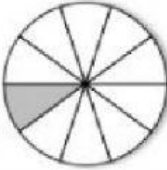


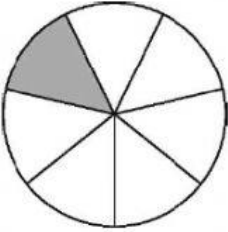
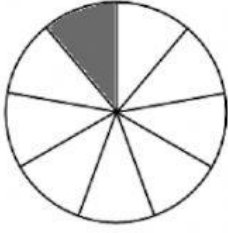


Look at the figures and CLICK at the fraction to choose the correct answer.

1) Which fraction is GREATER ?

<p>a)</p> <div style="display: flex; justify-content: space-around; align-items: center;"> <div style="text-align: center;">  <div style="border: 1px solid black; padding: 5px; width: 40px; text-align: center;"><math>\frac{1}{3}</math></div> </div> <div style="text-align: center;">  <div style="border: 1px solid black; padding: 5px; width: 40px; text-align: center;"><math>\frac{1}{4}</math></div> </div> </div>	<p>b)</p> <div style="display: flex; justify-content: space-around; align-items: center;"> <div style="text-align: center;">  <div style="border: 1px solid black; padding: 5px; width: 40px; text-align: center;"><math>\frac{1}{6}</math></div> </div> <div style="text-align: center;">  <div style="border: 1px solid black; padding: 5px; width: 40px; text-align: center;"><math>\frac{1}{4}</math></div> </div> </div>
<p>c)</p> <div style="display: flex; justify-content: space-around; align-items: center;"> <div style="text-align: center;">  <div style="border: 1px solid black; padding: 5px; width: 40px; text-align: center;"><math>\frac{1}{5}</math></div> </div> <div style="text-align: center;">  <div style="border: 1px solid black; padding: 5px; width: 40px; text-align: center;"><math>\frac{1}{4}</math></div> </div> </div>	<p>d)</p> <div style="display: flex; justify-content: space-around; align-items: center;"> <div style="text-align: center;">  <div style="border: 1px solid black; padding: 5px; width: 40px; text-align: center;"><math>\frac{1}{7}</math></div> </div> <div style="text-align: center;">  <div style="border: 1px solid black; padding: 5px; width: 40px; text-align: center;"><math>\frac{1}{5}</math></div> </div> </div>
<p>e)</p> <div style="display: flex; flex-direction: column; align-items: center;"> <div style="display: flex; align-items: center; margin-bottom: 20px;">  <div style="border: 1px solid black; padding: 10px; margin: 0 10px; text-align: center;"><math>\frac{1}{10}</math></div> </div> <div style="display: flex; align-items: center;">  <div style="border: 1px solid black; padding: 10px; margin: 0 10px; text-align: center;"><math>\frac{1}{5}</math></div> </div> </div>	<p>f)</p> <div style="display: flex; flex-direction: column; align-items: center;"> <div style="display: flex; align-items: center; margin-bottom: 20px;">  <div style="border: 1px solid black; padding: 10px; margin: 0 10px; text-align: center;"><math>\frac{1}{6}</math></div> </div> <div style="display: flex; align-items: center;">  <div style="border: 1px solid black; padding: 10px; margin: 0 10px; text-align: center;"><math>\frac{1}{8}</math></div> </div> </div>

2) Which fraction is SMALLER ?

<p>a)</p> <div></div> <div><math>\frac{1}{2}</math><math>\frac{1}{4}</math></div>	<p>b)</p> <div></div> <div><math>\frac{1}{4}</math><math>\frac{1}{6}</math></div>
<p>c)</p> <div></div> <div><math>\frac{1}{7}</math><math>\frac{1}{6}</math></div>	<p>d)</p> <div></div> <div><math>\frac{1}{10}</math><math>\frac{1}{8}</math></div>
<p>e)</p> <div><math>\frac{1}{3}</math></div> <div><math>\frac{1}{5}</math></div>	<p>f)</p> <div><math>\frac{1}{7}</math></div> <div><math>\frac{1}{9}</math></div>