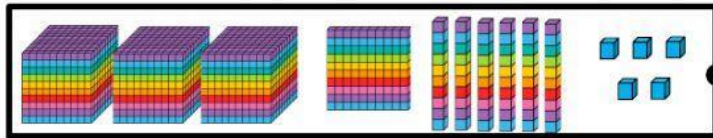


Name: _____ Date: _____

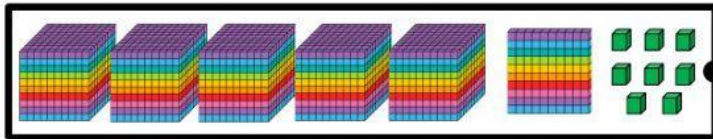
Place Value

Base 10 Blocks

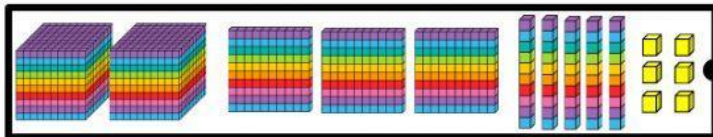
Draw a line from the base 10 blocks to the number they represent.



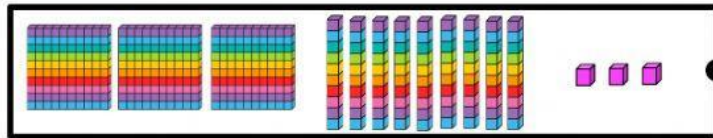
2,356



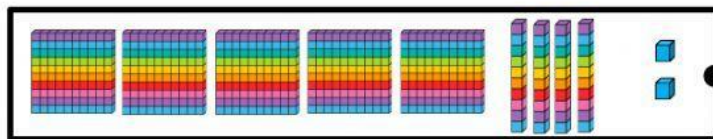
542



3,165



5,108



393

Write the number that is represented by the base 10 blocks on the line.

