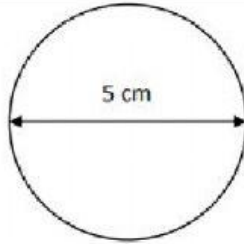




# CIRCUMFERENCE

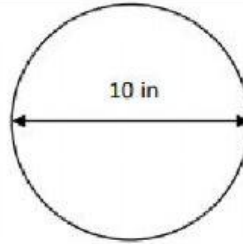
Work out the circumference of these circles using the diameter measurements.  
Give your answers to 1dp.

1)



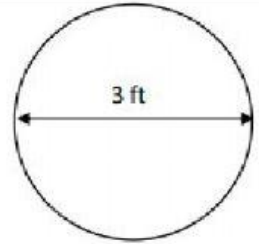
C = \_\_\_\_\_

2)



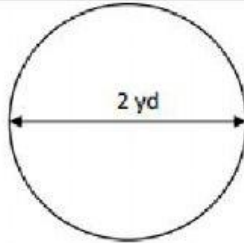
C = \_\_\_\_\_

3)

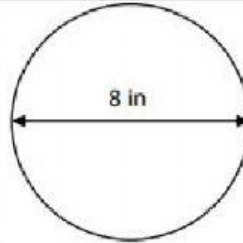


C = \_\_\_\_\_

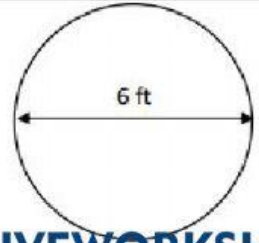
4)



5)



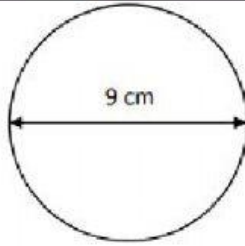
6)



# CIRCUMFERENCE

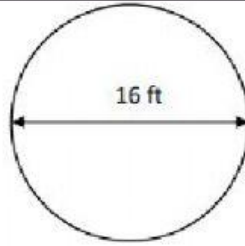


7)



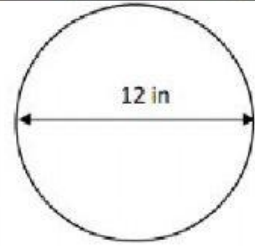
C = \_\_\_\_\_

8)



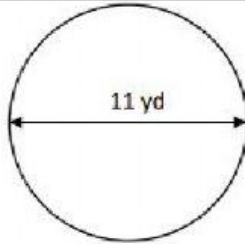
C = \_\_\_\_\_

9)



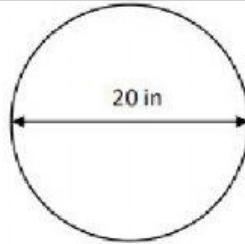
C = \_\_\_\_\_

10)



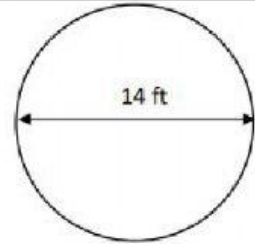
C = \_\_\_\_\_

11)



C = \_\_\_\_\_

12)



C = \_\_\_\_\_