

Name: _____

Date: _____

Worksheet 3 - Understand division (cont.)

A. Vocabulary

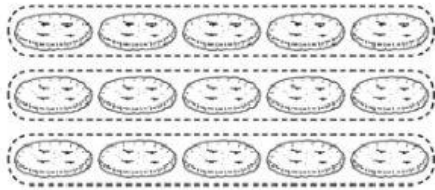
model: mô hình

share equally: chia đều

B. Practice

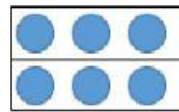
Write the division.

1.



$$15 \div 3$$

2.



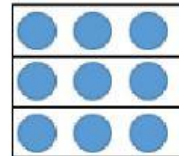
$$\underline{\hspace{1cm}} \div \underline{\hspace{1cm}}$$

3.



$$\underline{\hspace{1cm}} \div \underline{\hspace{1cm}}$$

4.

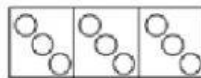


$$\underline{\hspace{1cm}} \div \underline{\hspace{1cm}}$$

5. Match each model with the true division.



$$9 \div 3$$



$$8 \div 2$$



$$20 \div 5$$

$$10 \div 2$$

6. Draw the model and write the division.

Linda shares 12 flowers equally into 4 vases.

Division: _____ \div _____

