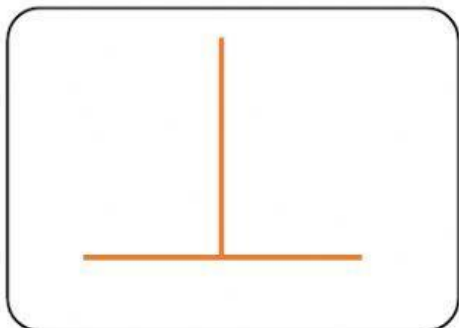
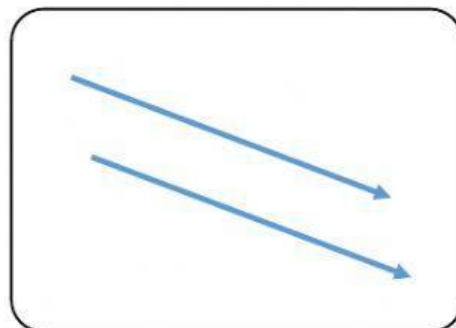




Perpendicular and Parallel Lines

A. Label the lines with **Perpendicular lines** or **Parallel lines**.







B. Which shape has perpendicular lines?



C. Which shape does not have any parallel lines?



D. Which shape does not have two sets of perpendicular lines?

