






Name: \_\_\_\_\_

**Mathematics**

**Measurement**

*Select the correct answer for each question.*

<p><i>Which object is longer?</i></p> 	<p><i>Which animal has shorter legs?</i></p> 
<p><i>Which object is taller?</i></p> 	<p><i>Which animal is shorter?</i></p> 
<p><i>Which animal is bigger?</i></p> 	<p><i>Which object is smaller?</i></p> 
<p><i>Which object is thinner?</i></p> 	<p><i>Which cat is fatter?</i></p> 
<p><i>Which object is wider?</i></p> 	<p><i>Which object is narrow?</i></p> 