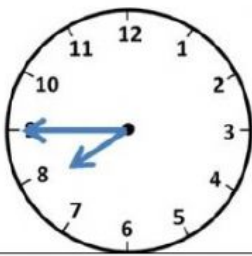


TELLING TIME – A QUARTER TO

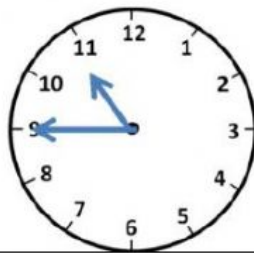


Watch the video and write the correct time underneath each clock

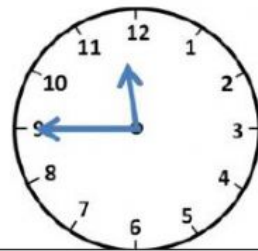


quarter to 8

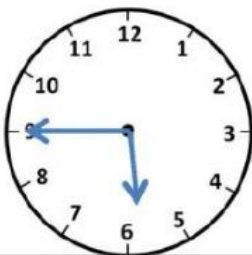
7:45



quarter to



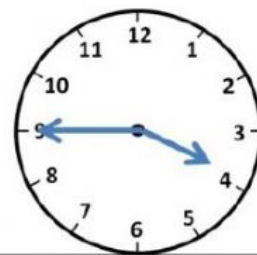
quarter to



quarter to



quarter to



quarter to

BY TEACHER SURAIMAH