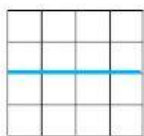


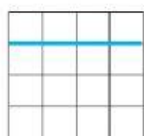
Họ và tên: .....

Lớp: 1/3

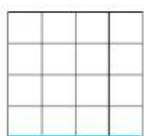
Bài 1: Điền đúng đường kẻ ngang số mấy?




.....



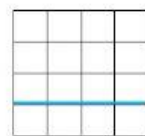
.....



.....




.....

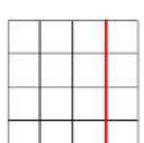


.....


Bài 2: Điền đúng đường kẻ dọc số mấy?



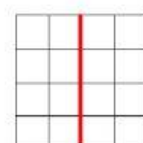
.....




.....



.....

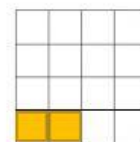

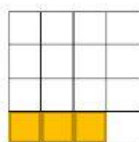


.....

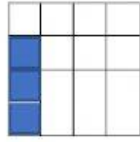
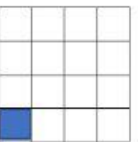



.....


Bài 3: Chọn hình biểu thị độ rộng “2 ô ly”



Bài 4: Chọn hình biểu thị độ cao “1 ô ly”



Bài 5: 1 ô vở có mấy đường kẻ, mấy ô ly?



5 đường kẻ, 4 ô ly

4 đường kẻ, 5 ô ly

CHÚC BẠN  
HỌC TỐT

