
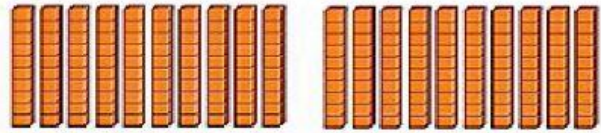
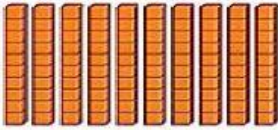


Understand Hundreds

What is the value of the base-ten block?



What is the value of the base-ten blocks shown?



= tens hundreds =

What is the value of the base-ten blocks shown?



= tens hundreds =