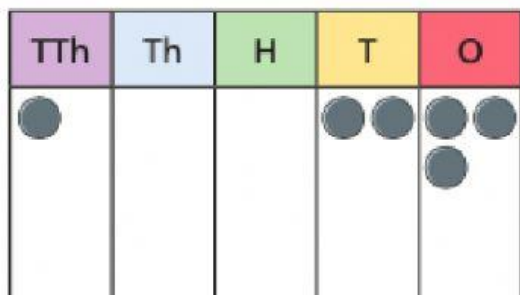
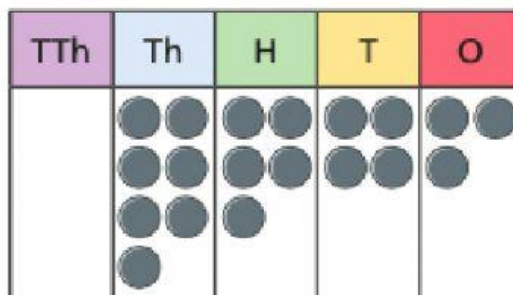


Comparing and Ordering Numbers

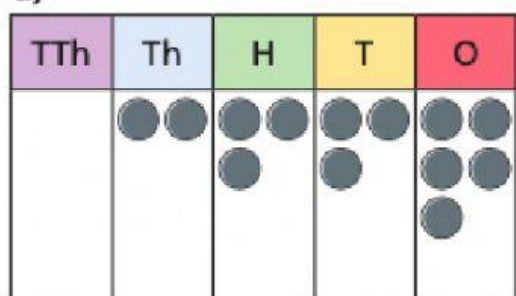
Tick the place value chart that represents the greater number.

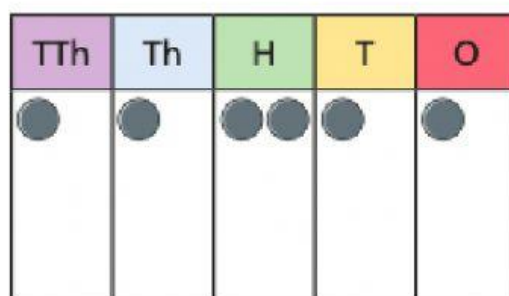

☐

☐

Write the numbers represented in the place value charts.

Write $<$, $>$ or $=$ to compare the numbers.

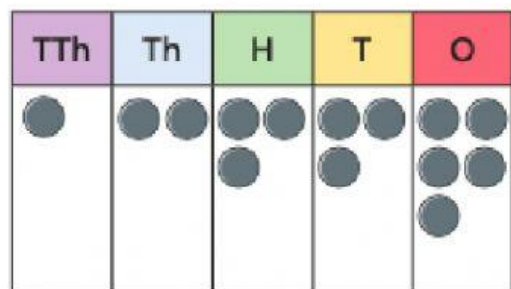
a)

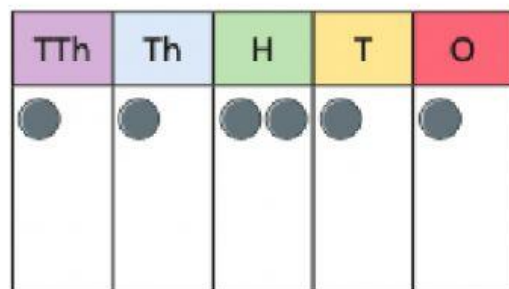






b)







The table shows the lengths of 5 rivers.

River	Length (km)
Amazon	6,992
Congo	4,700
Grande	1,360
Fraser	1,368
Seine	776

Number these rivers (1-5) showing smallest to biggest

Amazon

Fraser

Seine

Congo

Grande

Write the missing digits to complete the number sentences.

a) $201 > 20_$

b) $911 < _99$

c) $63_ < 631$