



Exercise

1.




The chicken weighs
_____ kg.

2.




The piece of watermelon
weighs _____ kheeds.

3.



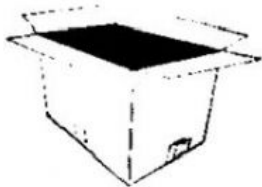
The frogs weigh
_____ g.

4.



The penguins weigh
_____ kg.

Exercise



5 kg



2 kg

1. The box is _____ than the pair of shoes.



300 g

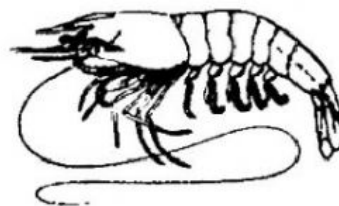


600 g

2. The banana is _____ than the apple.



5 kheeds



8 kheeds

3. The strawberry is _____ than the shrimp.