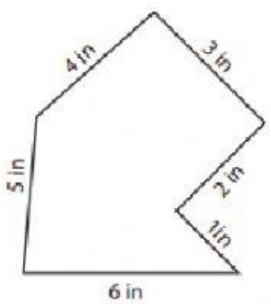


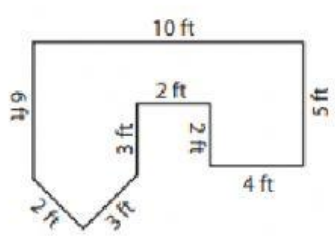
ACTIVIDAD DE RECUPERACIÓN TERCER PERIODO  
 ÁREA DE MATEMÁTICAS  
 AÑO 2021

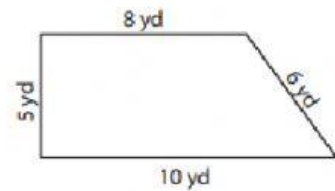
AREA: MATEMÁTICAS  
 DOCENTE: ANA MARIA CARRERO GARCIA  
 SIGNATURA: GEOMETRÍA  
 GRADO: CUARTO

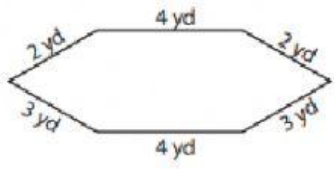
• PERIMETER.

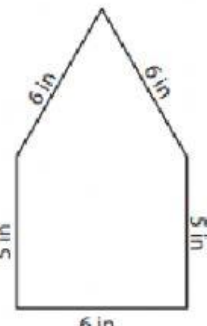
1. Find the perimeter for each shape. Show the process.

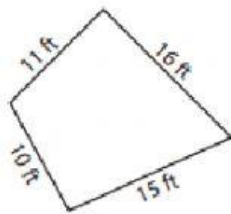
a) 

b) 

c) 


d) 


e) 


f) 


• PERIMETER OF SQUARES AND RECTANGLES

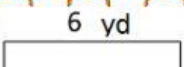
2. Find the perimeter for each shape. Apply the correct formula and show the process.

A) 

B) 

c) 

D) 

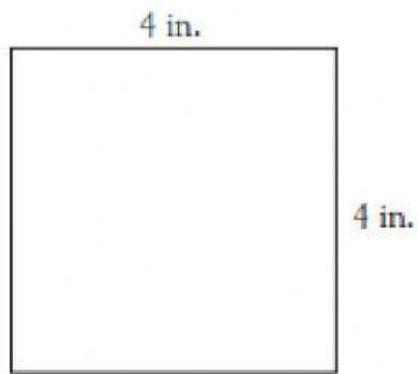
E) 

• AREA IN SQUARE UNITS




4. Find the area of the following shapes. Apply the correct formula and show the process.

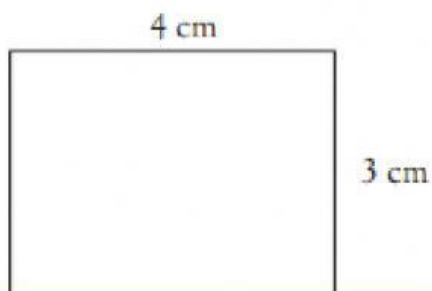
A.



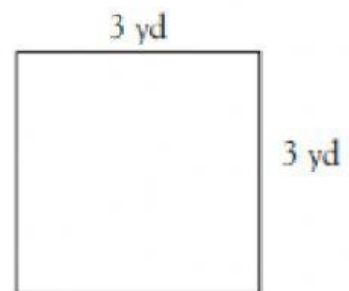
B.



C.



D.



• AREA OF TRIANGLES.

5. Find the area of the following triangles. Apply the formula and show the process.

