

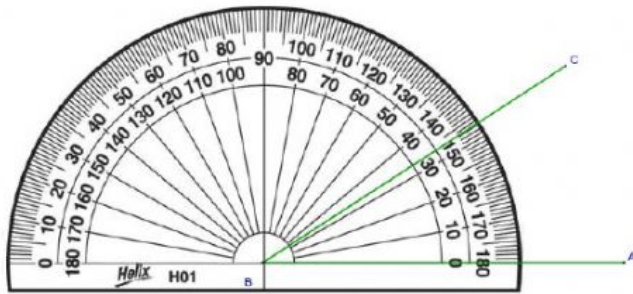
#### 4.MD.6 Review

I can measure or draw angles.

I will measure angles to the nearest degree.

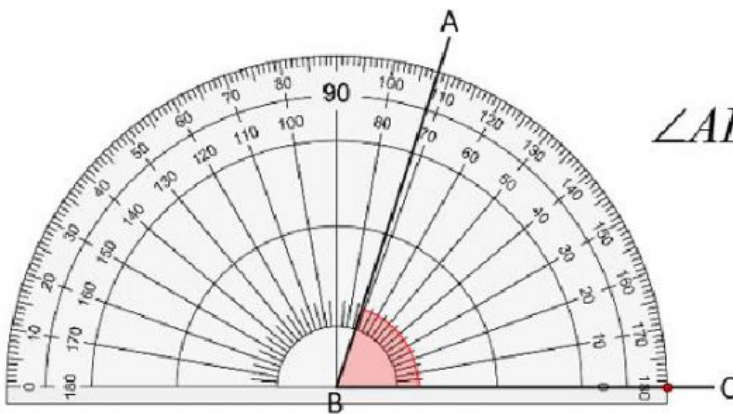
1-Which of the following is closest to the degree measure of angle ABC?

$\angle ABC =$



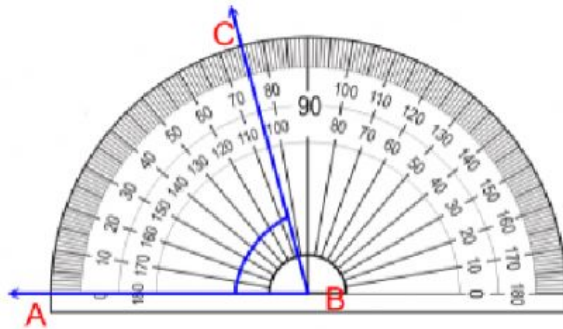
2-Jose used a protractor to measure the angle shown. What is the measure of the angle?

$\angle ABC =$



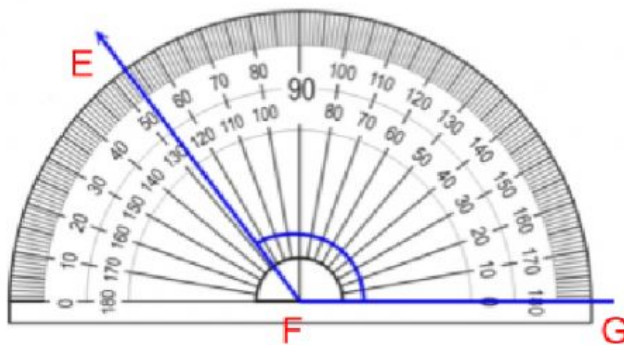
3- What is the measure of the angle shown?

$\angle ABC =$



4- Rachel used a protractor to measure this angle. What is the measure of the angle?

$\angle EFG =$



5- What is the measure of the angle shown?

$\angle TUV =$

