


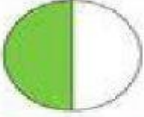



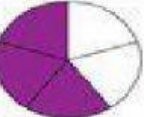
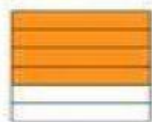


SARASAS WITAED CHONBURI SCHOOL

Name: _____ Grade 3/ ____ Student number: ____

Subject: Mathematics **Worksheets**

Directions: Shade the correct Fraction.

	<input type="radio"/>	$\frac{1}{2}$	<input type="radio"/>	$\frac{1}{4}$	<input type="radio"/>	$\frac{2}{3}$	<input type="radio"/>	$\frac{3}{4}$
	<input type="radio"/>	$\frac{1}{2}$	<input type="radio"/>	$\frac{1}{4}$	<input type="radio"/>	$\frac{2}{3}$	<input type="radio"/>	$\frac{3}{4}$
	<input type="radio"/>	$\frac{1}{2}$	<input type="radio"/>	$\frac{1}{4}$	<input type="radio"/>	$\frac{2}{3}$	<input type="radio"/>	$\frac{3}{4}$
	<input type="radio"/>	$\frac{1}{2}$	<input type="radio"/>	$\frac{1}{4}$	<input type="radio"/>	$\frac{1}{3}$	<input type="radio"/>	$\frac{2}{3}$
	<input type="radio"/>	$\frac{1}{2}$	<input type="radio"/>	$\frac{1}{4}$	<input type="radio"/>	$\frac{1}{3}$	<input type="radio"/>	$\frac{2}{3}$
	<input type="radio"/>	$\frac{1}{6}$	<input type="radio"/>	$\frac{1}{5}$	<input type="radio"/>	$\frac{3}{5}$	<input type="radio"/>	$\frac{2}{3}$
	<input type="radio"/>	$\frac{1}{2}$	<input type="radio"/>	$\frac{1}{6}$	<input type="radio"/>	$\frac{4}{6}$	<input type="radio"/>	$\frac{1}{3}$

Prepared by: Grade 3 Foreign Teachers.