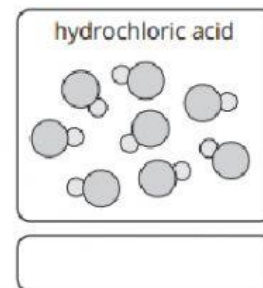
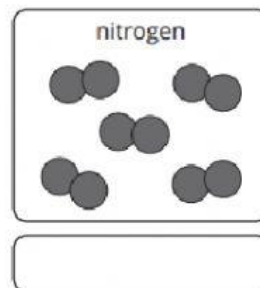
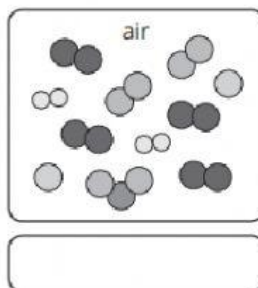
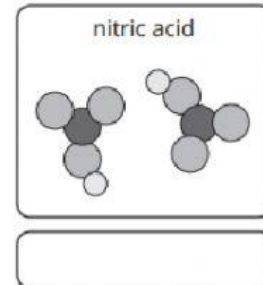
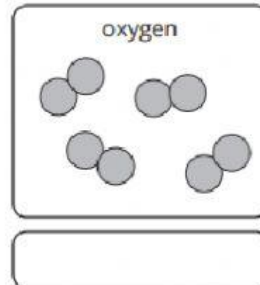
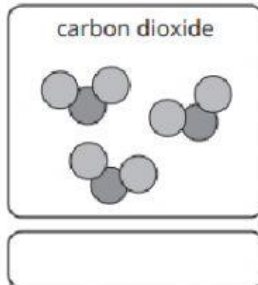


# Element, Compound or Mixture

1. State whether each substance below is an element, a compound or a mixture.



2. Complete the definitions using words from the box below.

An **element** is made up of \_\_\_\_\_ type of atom.

A **compound** is made up of \_\_\_\_\_ different atoms,  
\_\_\_\_\_ together.

A **mixture** is made up of \_\_\_\_\_ different atoms,  
\_\_\_\_\_ together.

two or more    two or more    only one    not chemically joined    chemically joined