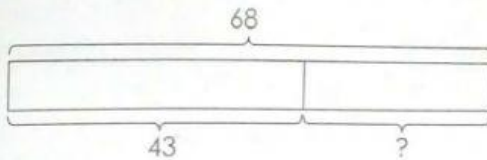


Solve these word problems.
Draw bar models to help you.
Show your work clearly.

A tailor bought 68 buttons.
He used 43 of them.
How many buttons did he have left?

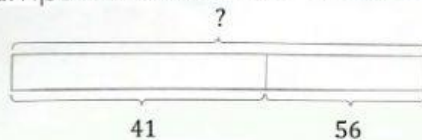


$$68 \bigcirc 43 = \underline{\hspace{2cm}}$$

He had buttons left.

- ☐ 1. Understand
- ☐ 2. Plan
- ☐ 3. Answer
- ☐ 4. Check

Julio has 41 Singapore stamps.
He has 56 Malaysian stamps.
How many stamps does he have altogether?

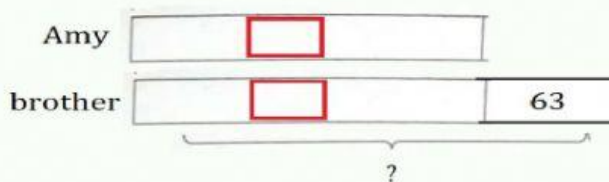


$$41 \bigcirc 56 = \underline{\hspace{2cm}}$$

He has stamps altogether.

- ☐ 1. Understand
- ☐ 2. Plan
- ☐ 3. Answer
- ☐ 4. Check

Amy has 25 stickers.
Her brother has 63 stickers more than her.
How many stickers does her brother have?



Her brother has stickers.