


Name _____




Dice



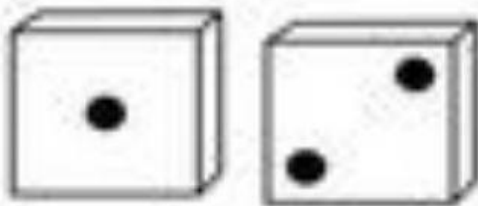
Addition




$$5 + 3 = \underline{\quad}$$




$$2 + 3 = \underline{\quad}$$




$$1 + 2 = \underline{\quad}$$



$$4 + 5 = \underline{\quad}$$



$$3 + 3 = \underline{\quad}$$



$$5 + 1 = \underline{\quad}$$

