



# SARASAS WITAED BURAPHA SCHOOL

## Worksheet Bilingual Program Semester 1/2021

Name: \_\_\_\_\_






Grade: \_\_\_\_\_

Subject: Science

Student Number: \_\_\_\_\_

### Force: A Push or Pull

**Directions:** Tell whether the pictures are a “push” or “pull”. Click on your answer.

	<input type="radio"/> push	<input type="radio"/> pull
	<input type="radio"/> push	<input type="radio"/> pull
	<input type="radio"/> push	<input type="radio"/> pull
	<input type="radio"/> push	<input type="radio"/> pull
	<input type="radio"/> push	<input type="radio"/> pull