





 ICM INSAN CENDEKIA MADANI	3D Shapes around You	Name :	
		Class :	
		Teacher :	
		Date :	
<input type="checkbox"/> Pre-assessment <input type="checkbox"/> Individual guided practice <input type="checkbox"/> Independent practice <input type="checkbox"/> Formative Assessment		Marks:	Score:
		12	

A. Choose the correct name of each shape:

	<input type="checkbox"/> Cylinder <input type="checkbox"/> Cone		<input type="checkbox"/> Cylinder <input type="checkbox"/> Sphere
	<input type="checkbox"/> Cuboid <input type="checkbox"/> Cube		<input type="checkbox"/> Cuboid <input type="checkbox"/> Cone
	<input type="checkbox"/> Sphere <input type="checkbox"/> Pyramid		<input type="checkbox"/> Cylinder <input type="checkbox"/> Cone

B. Choose the correct choice that best describes each object:

	<input type="checkbox"/> Cylinder <input type="checkbox"/> Cone		<input type="checkbox"/> Cylinder <input type="checkbox"/> Cone
	<input type="checkbox"/> Cone <input type="checkbox"/> Cuboid		<input type="checkbox"/> Cylinder <input type="checkbox"/> Sphere
	<input type="checkbox"/> Cube <input type="checkbox"/> Cone		<input type="checkbox"/> Pyramid <input type="checkbox"/> Cylinder