


Choose the correct Option

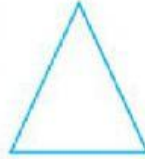
1. In the following figures, the figure that is not symmetric with respect to any line is:




(i)



(ii)



(iii)



(iv)

2. The number of lines of symmetry in a circle is

(A) 0 (B) 2 (C) 4 (D) more than 4

3. Which of the following letters have both horizontal and vertical lines of symmetry?

(A) X (B) E (C) M (D) K

4. Which of the following letters does not have any line of symmetry?
(A) M (B) S (C) K (D) H
5. Which of the following letters have both horizontal and vertical lines of symmetry?
(A) X (B) E (C) M (D) K