

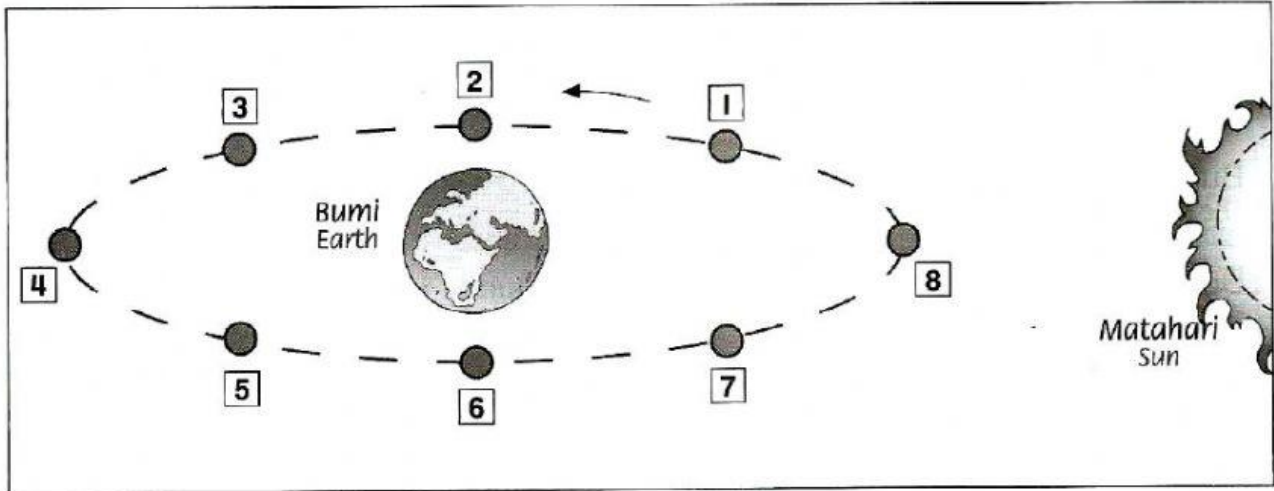
NAMA : \_\_\_\_\_

KELAS : \_\_\_\_\_

### UNIT 9 : BUMI

#### FASA BULAN

Rajah di bawah menunjukkan bentuk-bentuk bulan yang dilihat semasa Bulan beredar mengelilingi Bumi.



**Namakan fasa-fasa Bulan.**

1



\_\_\_\_\_

2




\_\_\_\_\_

3



\_\_\_\_\_

4




\_\_\_\_\_

5



\_\_\_\_\_

6



\_\_\_\_\_

7



\_\_\_\_\_

8



\_\_\_\_\_