


## Review 1. Mathematics Grade 1

*Bismillaahirrahmaanirrahim*

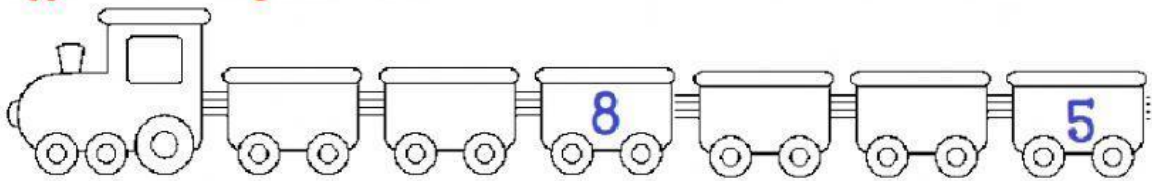
1. Count and type the correct number.



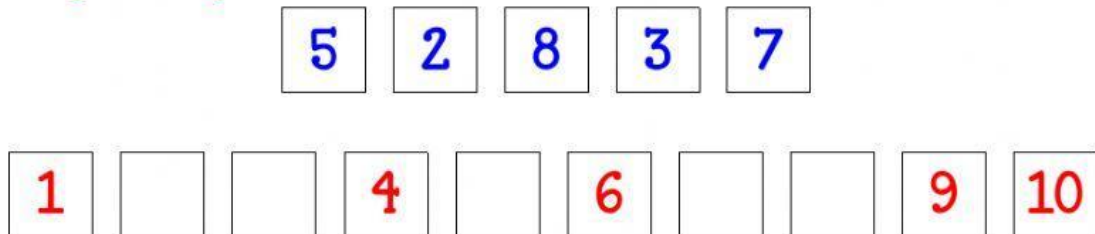
2. Match. One has been done for you.



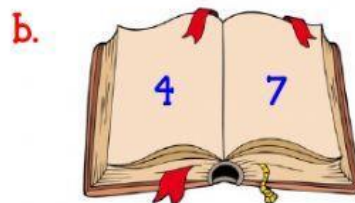
3. Type the missing numbers.



4. Drag and drop the numbers below into correct order.



5. Compare and click the larger number.



6. Compare and click the smaller number.





7. Which set has the **smaller number**? **CLICK** the box.





8. Which set has the **bigger number**? **CLICK** the box.



9. Which sets have the **same number**? **CLICK** both.




10. Complete with **more** or **fewer**.

a.  

Set A Set B

Set A has \_\_\_\_\_ balls than Set B.

b.  

Set A Set B

Set B has \_\_\_\_\_ lollipops than Set A.

*Alhamdulillahirobbil aalamiin*