

THELMA GIBSON PRIMARY SCHOOL
GRADE 3 PRETEST

Name: _____

1. How many rectangles are there from the given shapes below?

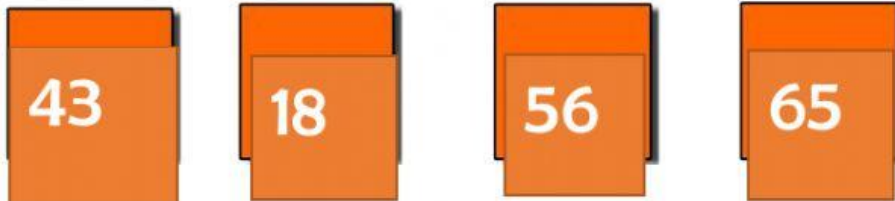
- a. 1 b. 4 c. 3 d. 2



2. Fill in the bubble with $<$, $>$ or $=$

55 ☐ 86 18 ☐ 14 44 ☐ 44

3. Place the numbers in order least to greatest



4. Add, Subtract or Multiply the given problems.

$$\begin{array}{r} 24 \\ - 11 \\ \hline \end{array}$$


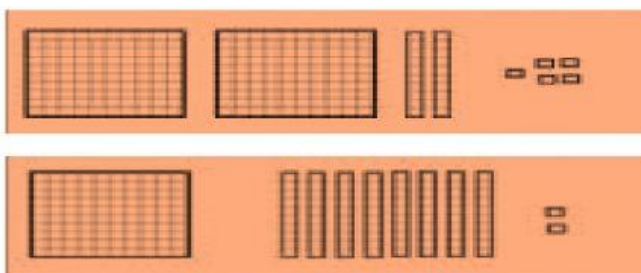
$$\begin{array}{r} 82 \\ + 17 \\ \hline \end{array}$$

$$2 \times \square = 6$$


$$14 - 12 = \underline{\hspace{2cm}}$$

$$11 + 8 = \underline{\hspace{2cm}}$$

5. Write the standard form in the shape provided:



6. Drag the correct time under the correct clock.



12:00

2:00

4:00



7. Write the value and place of the underlined digit

284 _____ value _____ place

8. Skip count fill in the blank spaces with the correct number

10, 20, 30, 40, _____, _____

5, 10, 15, _____, _____

9. Count the coins and place the answer in the space provided.



10. Write a number sentence for each story problem.

Shakera has 7 mangoes. She eats 2. Then she gives 3 away to Zya. How many mangoes does she have left?

Aiden had 8 pencils. He gave T'vario 2 pencils. How many pencils does Aiden have now?
