

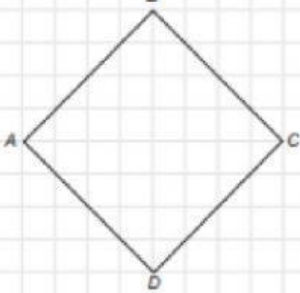
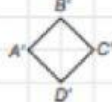
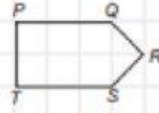
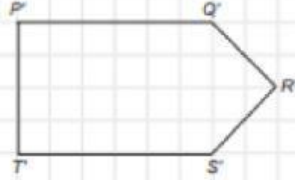
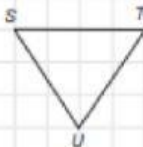
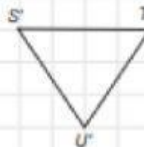
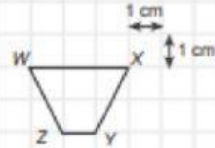
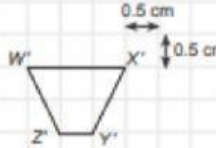
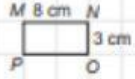

Name:

Class:

Date:

SCALE DRAWING

A. Determine the drawing scale / ratio of the pair of images below!

| | | |
|--|--|---|
| 1  |  | 1 : <input type="text"/> |
| 2  |  | <input type="text"/> : <input type="text"/> |
| 3  |  | 1 : <input type="text"/> |
| 4  |  | <input type="text"/> : <input type="text"/> |
| 5  |  | <input type="text"/> : <input type="text"/> |

B. Determine the missing side!

