

Name:


Date:

Class:

1. Disassemble the model of a helicopter below in order by writing numbers 1 to 5.

PL 3


(a)



(b)




(c)



(d)



(e)




2. The components above need to be stored in a storage container. Mark (✓) the suitable container to store the components above.

(a)



(b)



(c)

