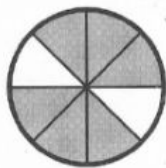


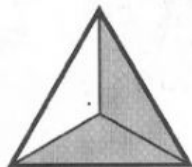
Name: \_\_\_\_\_

## Fractions

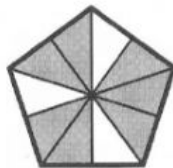
1. What fraction of each shape is shaded?



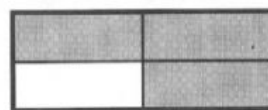
\_\_\_\_\_




\_\_\_\_\_




\_\_\_\_\_



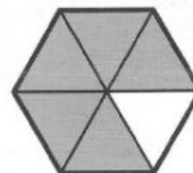
\_\_\_\_\_



\_\_\_\_\_



\_\_\_\_\_



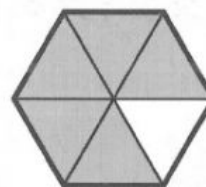
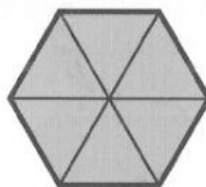
\_\_\_\_\_

2. Write in mixed numbers and improper fractions.  
The first is done for you.



Complete.



$$1 \frac{3}{5} = \frac{8}{5}$$

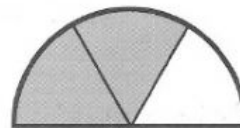
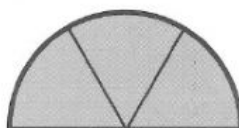
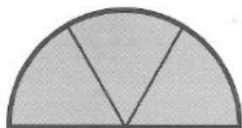
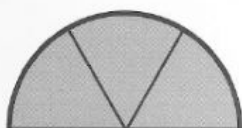


$$\underline{\hspace{1cm}} = \underline{\hspace{1cm}}$$



\_\_\_\_\_ = \_\_\_\_\_

\_\_\_\_\_ = \_\_\_\_\_



\_\_\_\_\_ = \_\_\_\_\_