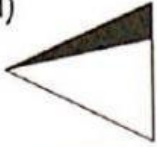
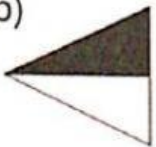







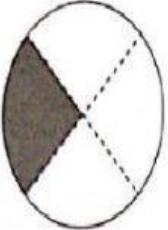



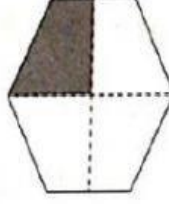


# 分数

A. 把涂黑部分代表二分之一的图形画√，不是的画X。

1 (a) 	(b) 	2 (a) 	(b) 
<input type="checkbox"/>	<input type="checkbox"/>	<input type="checkbox"/>	<input type="checkbox"/>
3 (a) 	(b) 	4 (a) 	(b) 
<input type="checkbox"/>	<input type="checkbox"/>	<input type="checkbox"/>	<input type="checkbox"/>

B. 涂黑的部分表示什么分数？写一写。

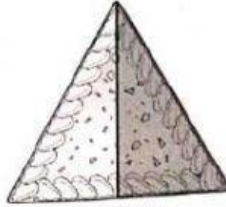
1 	2 	3 
四分之_____	四分之_____	四分之_____
4 	5 	6 
_____	_____	_____

C. 根据涂黑部分所代表的分数，正确的打√，不正确的打X。


1

四分之一

a



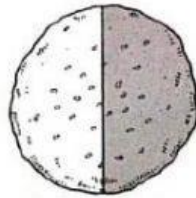
b



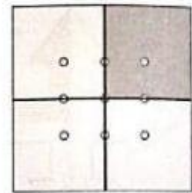
2

二分之一

a



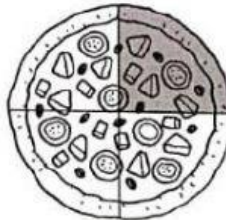
b



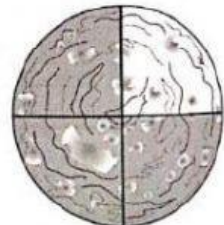
3

四分之三

a




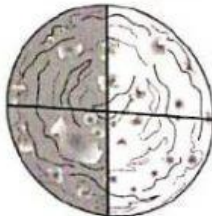
b



4

四分之二

a



b

