

15 minutes past 4

25 minutes to 8

5 minutes to 1

8 minutes past 11

29 minutes to 4

17 minutes to 6

20 minutes past 2

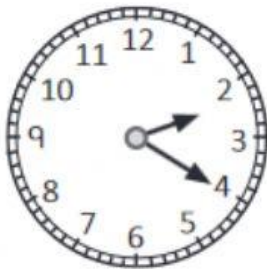
10 minutes to 7

23 minutes past 3

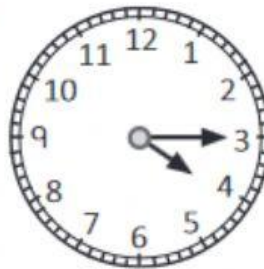
## Practice 1 Telling Time

1. Use **past** to tell the time.


(a)



(b)



(c)




2. Use **to** to tell the time.

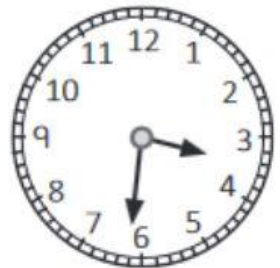
(a)



(b)




(c)




3. Use **past** or **to** to tell the time.

(a)



(b)



(c)

