




WORKSHEETS

PART
#1

For the Prathomsueksa 6 students of Bangkulad School

Name: _____ Room: _____ Number: _____

A. Click **CORRECT** if the sentence is correct and **WRONG** if the sentence is wrong.

- There are two types of charges. **CORRECT** **WRONG**
- The symbol for positive charge is . **CORRECT** **WRONG**
- Two positive charges will attract each other. **CORRECT** **WRONG**
- Two negative charges will repel each other. **CORRECT** **WRONG**

B. Find the net charge in each rectangle. Click the choice of the correct answer.

- | | | | | | | | |
|---|---|---|---|---|---|---|---|
| + | + | - | + | + | - | + | + |
| + | - | - | - | - | + | + | + |

+5	-6
+11	0
- | | | | | | | | |
|---|---|---|---|---|---|---|---|
| - | + | - | - | - | - | - | + |
| + | - | - | - | - | + | + | + |

+6	0
-13	-7
- | |
|--|
| |
|--|

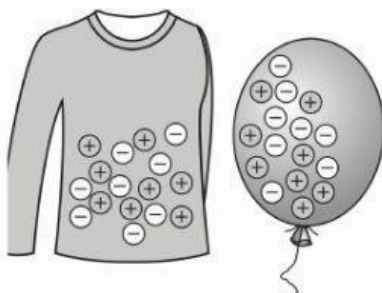

+	-
=	0

C. Choose the word from the box and drag it to the answer box. What kind of interaction will the two objects have?

Attract

Repel

No Effect

- 
- 
- 