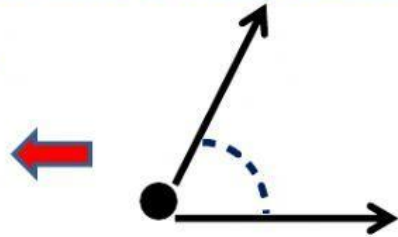


INTERACTIVE WORKSHEET CLASS :V, SUBJECT: MATHS

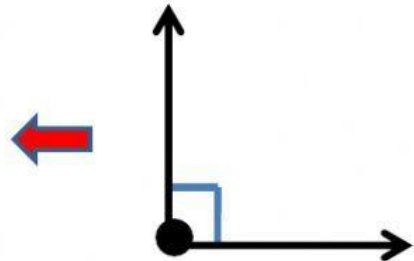
Q.2 Match the following types of angles with their correct names.

Note: Drag lines to match the arrows.

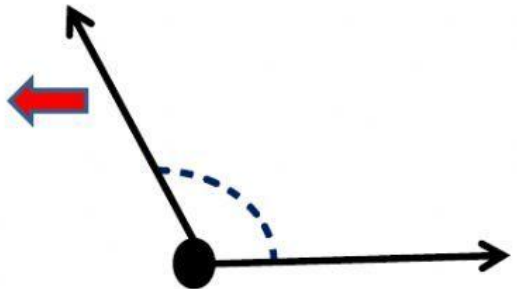
Right Angle →



Obtuse Angle →



Acute Angle →



Reflex angle →



Straight angle →

