



Exercise.


1. Which magnet is stronger?

Magnets have different strengths too.

Which is the stronger magnet? Put a tick (✓) in the box.





2. Which of these objects are magnetic materials?

☐☐☐☐



3. Which of these objects are non-magnetic materials?



4. Which of these objects that magnets can work through?





5. Classify these magnets.

U-shaped
magnet



Bar magnet



6. What can make the magnets weaker?

☐ Dropping the magnet

☐ Washing the magnet

☐ Freezing the magnet

☐ Burning the magnet