

































Pizza pictograph

Day	Number of pizzas sold
Monday	    
Tuesday	        
Wednesday	   
Thursday	       
Friday	     



= 5 pizzas

1. How many pizzas did he sell on Thursday? _____
2. Which day did he sell the least pizzas? _____
3. Which day did he sell the most pizzas? _____
4. Which day did he sell 25 pizzas? _____
5. How many pizzas did he sell on Monday and Wednesday? _____
6. Were more pizzas sold on Monday or Friday? _____
7. How many less pizzas were sold on Friday than Thursday? _____
8. How many pizzas did he sell in five days? _____