



ESCUELA EVANGELICA PENIEL
MATH EXAM
III PARTIAL
2ND GRADE 2021

Name: _____

Date: _____

A. Write the number in word form.

1. $400 + 70 + 2$

Word form: _____

2. $500 + 60 + 7$

Word form: _____








3. $600 + 30 + 3$

Word form: _____

4. $800 + 0 + 8$

Word form: _____


B. Write the numbers in expanded form. Follow the example.

 234	200	+	30	+	4
 513		+		+	
 673		+		+	
 947		+		+	
 682		+		+	
 870		+		+	
 701		+		+	

C. Fill the chart with the missing numbers.

5			20		30			45	50
	60	65				85		95	
105				125		135			150
155					180		190		200

D. Fill the spaces with the missing numbers.



E. Circle the words to make the equation true.

56 is greater than 51 is less than	12 is greater than 18 is less than	45 is greater than 54 is less than
23 is greater than 31 is less than	51 is greater than 51 is equal to	81 is greater than 76 is less than

F. Compare the numbers and write Greater than or less than.



Less Than Gator

VS



Greater Than Gator

> < 173 259

> < 42 65

> < 80 121

> < 325 321

> < 18 31

54 64 > <

65 72 > <

15 23 > <

61 16 > <

35 27 > <