


Name: _____

MASS

A. Write the weight of the following objects.


1.



2.



3.

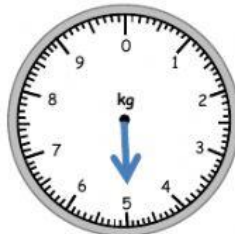


B. Draw the needle of the weighing scale to show the given weight.

1.



2.



3.



4.



5.



6.

