



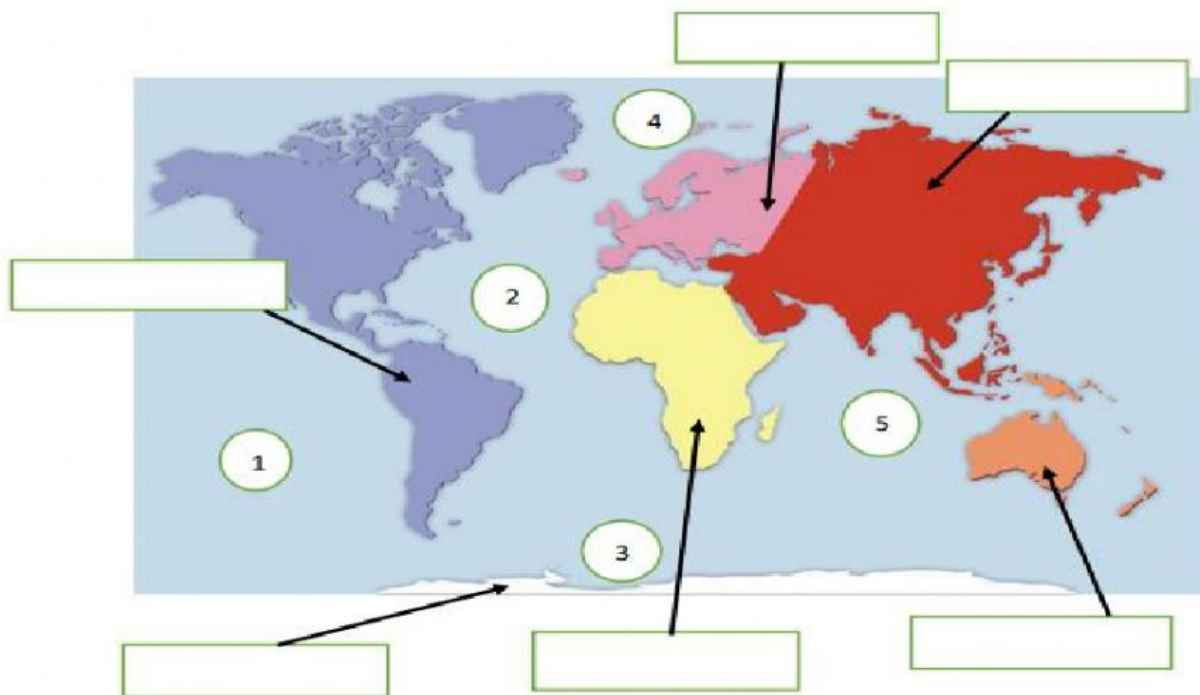
WORKSHEET N°18

Name: _____ Date: _____

UNIT 3: "Chile in the map"

I. Follow the instructions:

- 1. Write the name of the country in the with rectangles**
- 2. Follow the numbers and write the names of the oceans on the lines.**



Oceans:

1	_____
2	_____
3	_____
4	_____
5	_____

II. Select the correct answer.

1. How many continents does the planet have?

- A) 4
- B) 5
- C) 6
- D) 7

2. How many oceans does the planet have?

- A) 4
- B) 5
- C) 6
- D) 7

3. The capital of Chile is_____.

- A) Concepción
- B) Tomé
- C) San Pedro
- D) Santiago

4. How many regions does Chile have?

- A) 6
- B) 10
- C) 20
- D) 16



COLEGIO INGLÉS BRITISH ROYAL SCHOOL CONCEPCIÓN
Paicavi Nº 3281, Alto Los Principes - Concepción
Fonos (41) 2522020 – 2522929
Teacher: Miss. Sofia Almonacid
Subject: Social – 1st Grade

WORKSHEET N°19

Name: _____ Date: _____

UNIT 3: "The landscapes"

I. Follow the instructions.


A) Circle with **green** the natural elements.

B) Circle with **red** the man-made elements.



II. Draw 2 element for each category

MAN-MADE ELEMENTS	NATURAL ELEMENTS





WORKSHEET N°20

Name: _____ Date: _____

UNIT 3: "My city or town foundation"

I. Select the correct answer.

1. Concepción was founded by _____.
A) Cristobal Colón
B) Mapuche people
C) Pedro de Valdivia
2. The city of Concepción was founded in _____.
A) 2021
B) 2007
C) 1550
3. A commemoration is a way to _____.
A) Celebrate Christmas
B) Remember an important person
C) Celebrate a birthday

II. Color the picture of Pedro de Valdivia.





COLEGIO INGLÉS BRITISH ROYAL SCHOOL CONCEPCIÓN
Paicavi Nº 3281, Alto Los Príncipes - Concepción
Fonos (41) 2522020 – 2522929
Teacher: Miss. Sofía Almonacid
Subject: Social – 1st Grade

WORKSHEET N°21

Name: _____ Date: _____

UNIT 3: "Vocabulary elements in the landscape"

I. Match the natural elements with the corresponding word.



MOUNTAIN

DOG

LAKE

OCEAN

TREE

II. Match the man-made elements with the corresponding word.



PORT

BUILDING

BRIDGE

ROAD



COLEGIO INGLÉS BRITISH ROYAL SCHOOL CONCEPCIÓN
Paicavi Nº 3281, Alto Los Principes - Concepción
Fonos (41) 2522020 – 2522929
Teacher: Miss. Sofia Almonacid
Subject: Social – 1st Grade

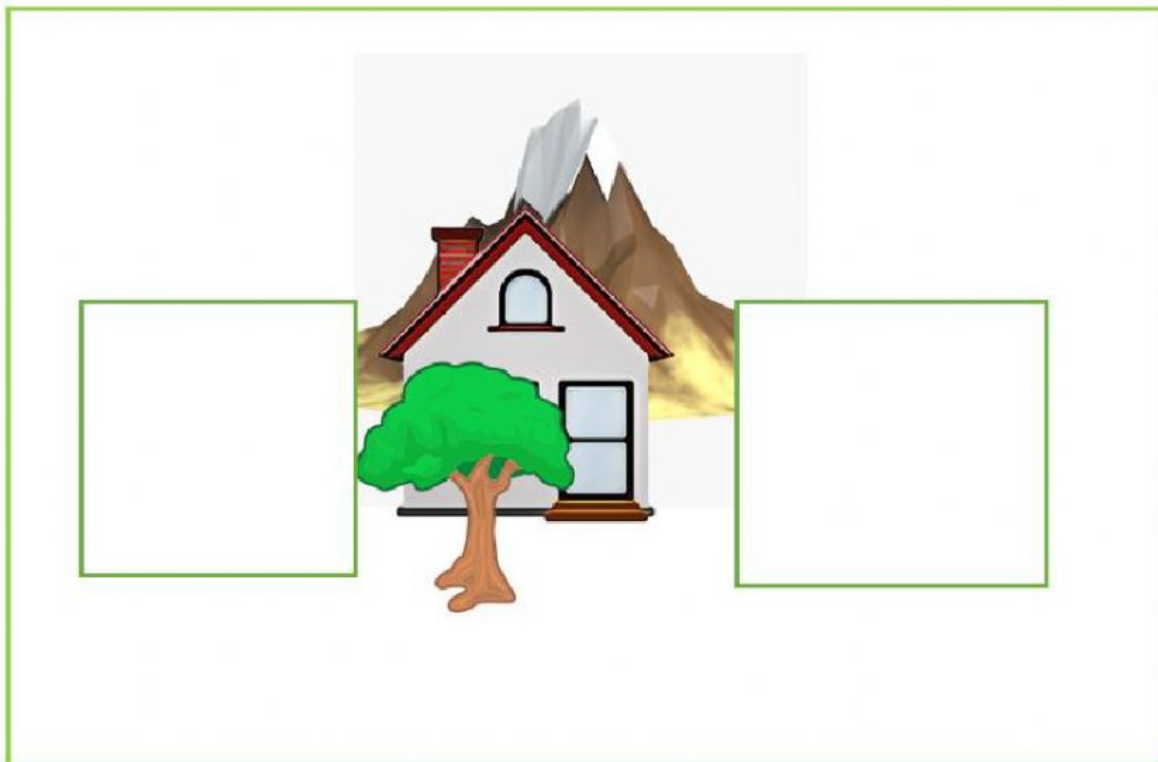
WORKSHEET N°22

Name: _____ Date: _____

UNIT 3: "Describing landscapes"

I. Follow the instructions:

- A) Draw a house.
- B) Draw a tree in front of the house.
- C) Draw a girl to the right of the house.
- D) Draw a boy to the left of the house.
- E) Draw mountains behind the house.



II. Complete the following description.



The font is to the _____ of the bench.

There is a city _____ the trees.

The bench is to the _____ of the font.

The car is _____ of the bench.

IN FRONT

LEFT

RIGHT

BEHIND