



More About Numbers to 100

﴿Bismillaahirrahmaanirrohiim﴾

Answer the questions based on the instruction given.


1. Round each number to the nearest ten.

a. 13 

c. 19 

e. 25 


b. 15 

d. 22 

f. 27 

2. Round each number to the nearest ten.

a. 32 

c. 38 

e. 45 

b. 35 

d. 44 

f. 46 

3. Round each number to the nearest ten.

a. 54 

c. 56 

e. 65 

b. 55 

d. 63 

d. 67 

4. Round each number to the nearest ten.

a. 71 

c. 79 

e. 85 

b. 75 

d. 82 

f. 88 

﴿Alhamdulillahirrabbilamin﴾