


加一加 (Addition)



tens	ones
1	3
+	4
<hr/>	

tens	ones
1	0
+	3
<hr/>	

tens	ones
1	6
+	0
<hr/>	

tens	ones
1	1
+	4
<hr/>	

tens	ones
1	1
+	0
<hr/>	

tens	ones
1	2
+	2
<hr/>	

tens	ones
1	3
+	5
<hr/>	

tens	ones
1	1
+	1
<hr/>	

tens	ones
1	0
+	9
<hr/>	

tens	ones
1	2
+	4
<hr/>	

tens	ones
1	2
+	6
<hr/>	

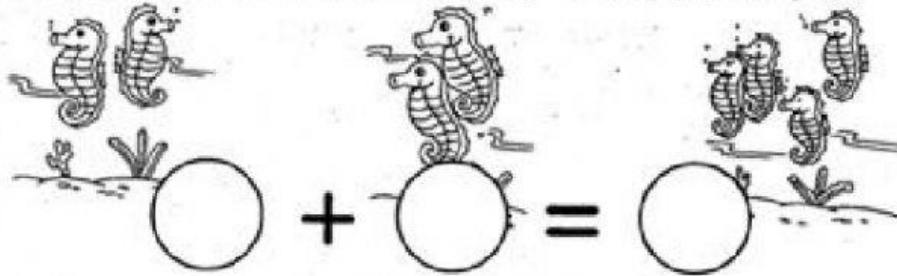
Add and write the correct answer.

加一加，然后写出正确的答案。



There are 2 sea horses in the sea, 2 more sea horses come along.
How many sea horses are there altogether?

海里有 2 只海马，后来又来了 2 只海马，一共有多少只海马？

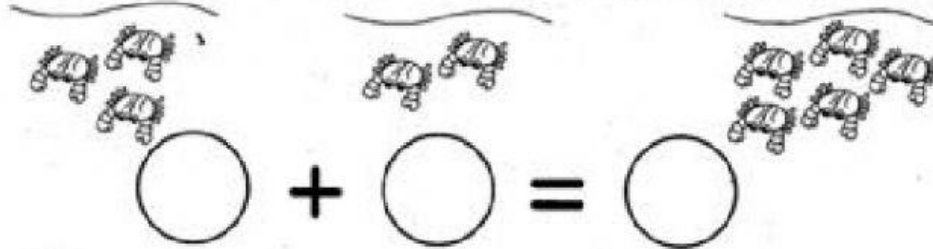


There are _____ sea horses altogether.

海里一共有 _____ 只海马。

There are 3 crabs on the beach. If 2 more crabs come along, how many crabs will there be on the beach?

沙滩上有 3 只螃蟹，如果又来了 2 只，那么沙滩上共有几只螃蟹？

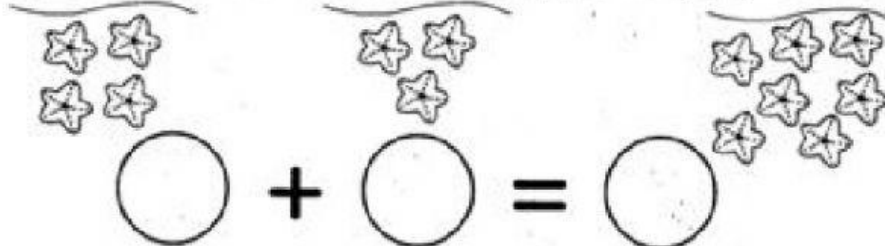


There will be _____ crabs on the beach.

沙滩上共有 _____ 只螃蟹。

There are 4 starfish in the pail. I put in 3 more starfish.
How many starfish are there altogether?

水桶里有 4 只海星，我再放进 3 只，一共有多少只海星？



There are _____ starfish altogether.

水桶里一共有 _____ 只海星。

Solve the word problems.

解答应用题。



Fay has 9 blue pens. She buys 6 more black pens. How many pens does Fay have altogether?

范儿有9支蓝笔，她又买了6支黑笔，她一共有几支笔？



$$\square + \square = \square$$





Fay has _____ pens altogether.

范儿一共有_____支笔。

Ted has 5 cookies. He buys 10 more cookies. How many cookies does Ted have altogether?

小特有5块饼干，他又买了10块饼干，他一共有几块饼干？



$$\square + \square = \square$$



Ted has _____ cookies altogether.

小特一共有_____块饼干。

Fiona has 11 muffins. Her friend gives her 3 more muffins. How many muffins does Fiona have altogether?

菲娜有11个松饼，朋友再给了她3个，她一共有几个松饼？



$$\square + \square = \square$$



Fiona has _____ muffins altogether.

菲娜一共有_____个松饼。