



## การลบแนวนอน

จงหาผลลัพธ์การลบจากโจทย์ที่กำหนดให้

ชื่อ-นามสกุล.....

วันที่.....

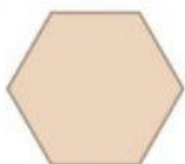
1.  $9 - 3 =$



2.  $7 - 7 =$



3.  $8 - 2 =$



4.  $6 - 0 =$



5.  $7 - 1 =$




6.  $8 - 5 =$



7.  $6 - 4 =$




8.  $9 - 9 =$




9.  $8 - 7 =$



10.  $4 - 2 =$




11.  $8 - 3 =$



12.  $7 - 5 =$



13.  $9 - 3 =$



14.  $4 - 0 =$

