

DARBARI LALI DAV MODEL SCHOOL, PITAMPURA

MATHS BEE - AUGUST

CLASS - 2

DATE - 23/08/2021

Q1. Add the following sums.

T O

$$\begin{array}{r} \text{A) } 48 \\ + 32 \\ \hline \\ \hline \end{array}$$

T O

$$\begin{array}{r} \text{B) } 30 \\ + 66 \\ \hline \\ \hline \end{array}$$

H T O

$$\begin{array}{r} \text{C) } 359 \\ + 169 \\ \hline \\ \hline \end{array}$$

H T O

$$\begin{array}{r} \text{D) } 428 \\ + 297 \\ \hline \\ \hline \end{array}$$

Q2. Choose the correct option.

A) $100 + 90 = 190$ 109 910

B) $50 + 50 =$ 500 100 150

c) $30 + 20 =$ 60 40 50

D) $500 + 0 = 0 \quad 500 \quad 050$

Q3. Match the numbers with their sums.

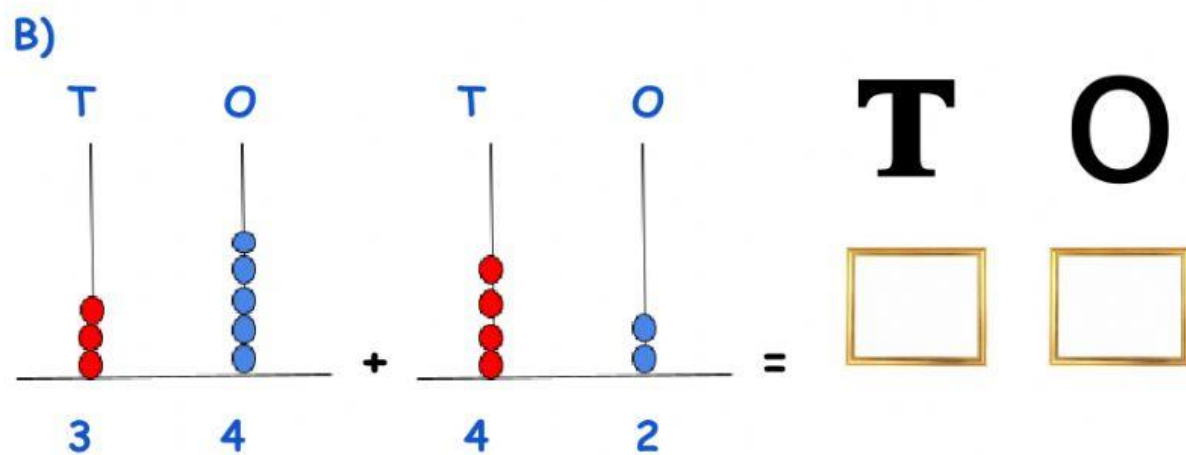
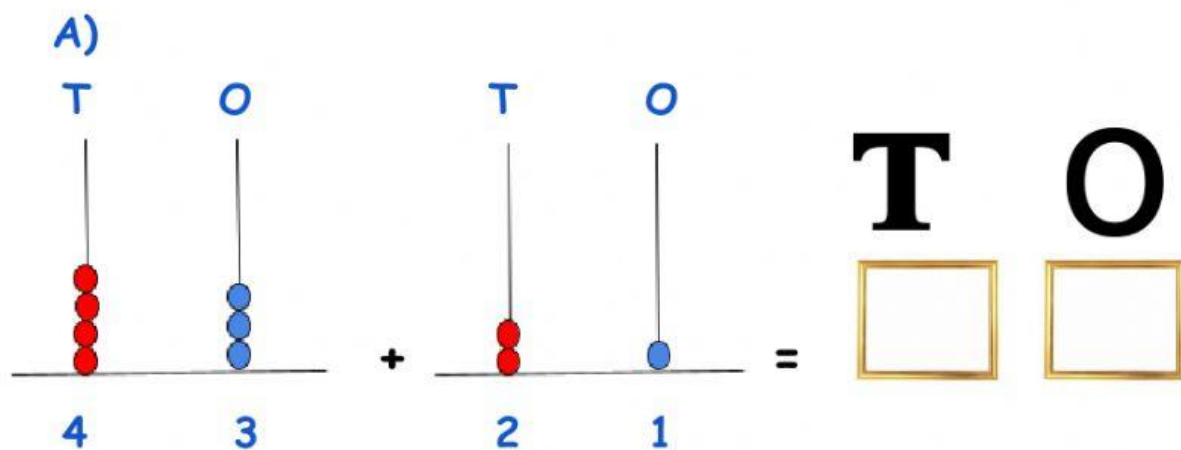
1) $25 + 25$ 21

2) $100 + 100$ 20

3) $13 + 7$ 200

4) $15 + 6$ 50

Q4. Solve the abacus and write the answer.



Q.5 Riya has 9  dolls . Her mother
gave her 9 more  dolls.

How many dolls does Riya have now ?

Q6. An ice-cream shop sells 85  on
Monday and 45  on Tuesday.

How many ice-creams
did the shop sell
in two days ?



Q7. Lion eats 37 rabbits in the month of June and 41 rabbits in the month of July. How many rabbits did the lion eat in two months ?

T O

Number of rabbits in June = _____
Number of rabbits in July = + _____
Total number of rabbits = _____

Ans. Lion eats _____ rabbits .

Q8. There are 518 green gems and 326 red gems in a bag. How many gems are there in all ?

H T O

Number of green gems = _____
Number of red gems = + _____
Total number of gems = _____


Ans. There are _____ gems in the bag.

Q9. Add the following .

A)



B)



C)

