

	Module Evaluation Paper ACADEMIC YEAR 2021/2022	
	Subject : Math	Name :
	Primary : 1	Day/ Date :

I. Circle the correct answer !

- 

How many cupcake are there ?

a. 12 b. 9 c. 8
- 

a. 15 b. 10 c. 11
- One more of 14 is ...

a. 17 b. 15 c. 13
- One less of 18 is ...

a. 17 b. 19 c. 14
- 17 is 13

a. Smaller than b. greater than c. equal to
- 19 is 20

a. Smaller than b. greater than c. equal to

7. 12,....., 14. What is the correct number to fill the blank?
a. 15 b. 13 c. 16
8., 17, 18. What is the correct number to fill the blank?
a. 16 b. 15 c. 14
9. 17,18,..... . What is the correct number to fill the blank?
a. 16 b. 14 c. 19
10. 1 ten + 5 ones =
a. 5 b. 10 c. 15

II. Write the correct answer.

1. Please write in number.

Twenty	
Eight	
fourteen	


2. Please write in words.

18	
15	
17	

3. Please write the missing number.

1				5			8		10
	19				15		13		11

4. Look at the picture.



Fill in the blanks with less than or more than.

a. The number of rabbits is
the number of cats.

b. The number of cats is
the number of birds.