

# D.A.V. PUBLIC SCHOOL, PRATAP VIHAR

CLASS-FIRST


SUBJECT MATHS

TOPIC -ORDINAL NUMBERS

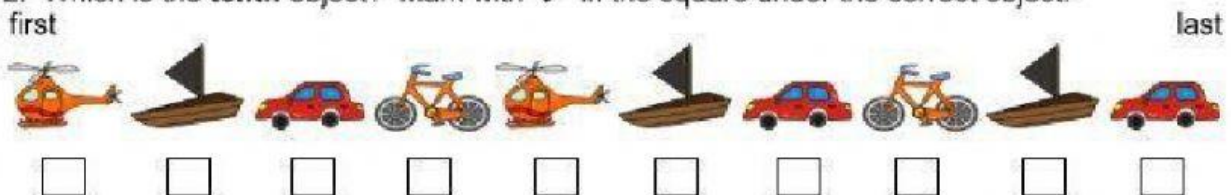
Name: \_\_\_\_\_

## Counting: Ordinal numbers - Worksheet 2

1. Which is the **seventh** object? Mark with ✓ in the square under the correct object.




2. Which is the **tenth** object? Mark with ✓ in the square under the correct object.



3. Which is the **fourth** object? Mark with ✓ in the square under the correct object.



4. Which is the **first** object? Mark with ✓ in the square under the object.



5. Which is the **fifth** object? Mark with ✓ in the square under the object.

