

NAME \_\_\_\_\_

SEC \_\_\_\_\_

DATE \_\_\_\_\_


1. Compare the following animals in terms of height and fill in the blanks.



hippopotamus



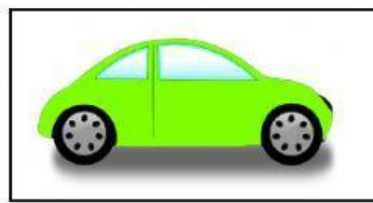
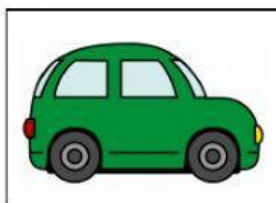
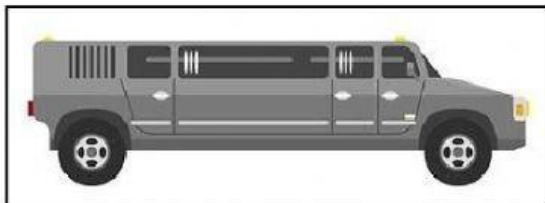
mouse





leopard

- a) The \_\_\_\_\_ is the tallest animal here.
- b) The \_\_\_\_\_ is the shortest animal here.
- c) Leopard is \_\_\_\_\_ than the mouse. (taller/ shorter)
- d) Mouse is \_\_\_\_\_ than the leopard. (taller/ shorter)

2. Which of the following is longest? (Choose one box)



3. Choose the animal that has shorter neck.



4. Which of the following is tallest? (Choose one box)

